

Heatherwood Mathletes  
Orange Belt Home Exercises  
October 14, 2004

Name \_\_\_\_\_



Date \_\_\_\_\_

## Mixed Review

(Answer ID # 1073713)

Circle the **larger** number.

1. 9	1	2. 10	7	3. 4	3
4. 0	6	5. 2	8	6. 5	9

Fill in the missing numbers to complete the subtraction fact.

7. $\begin{array}{r} 7 \\ - \square \\ \hline 1 \end{array}$	8. $\begin{array}{r} \square \\ - 3 \\ \hline 2 \end{array}$	9. $\begin{array}{r} \square \\ - 8 \\ \hline 1 \end{array}$	10. $\begin{array}{r} 5 \\ - \square \\ \hline 1 \end{array}$	11. $\begin{array}{r} 10 \\ - \square \\ \hline 3 \end{array}$
--	--	--	---	--

Circle the **smaller** number.

12. 15	19	13. 13	17	14. 14	16
15. 20	12	16. 11	19	17. 14	12

Order each group of numbers from smallest to largest.

18.

36, 12, 14, 3

\_\_\_\_\_, \_\_\_\_\_, \_\_\_\_\_, \_\_\_\_\_

19.

92, 37, 5, 29

\_\_\_\_\_, \_\_\_\_\_, \_\_\_\_\_, \_\_\_\_\_

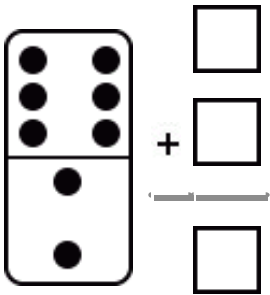
20.

17, 50, 30, 0

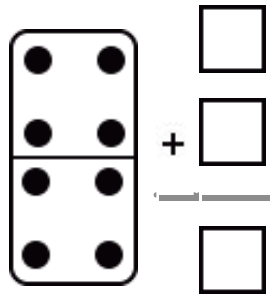
\_\_\_\_\_, \_\_\_\_\_, \_\_\_\_\_, \_\_\_\_\_

Fill in the missing numbers to complete the addition fact.

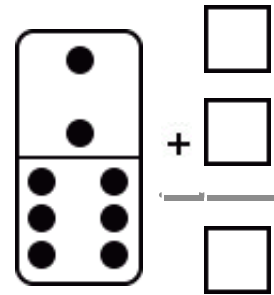
21.



22.



23.



Fill in the missing numbers.

24.

$$\begin{array}{r} \square \\ + 5 \\ \hline 15 \end{array}$$

$$\begin{array}{r} 15 \\ - \square \\ \hline 5 \end{array}$$

25.

$$\begin{array}{r} 19 \\ - 9 \\ \hline \square \end{array}$$

$$\begin{array}{r} 9 \\ + \square \\ \hline 19 \end{array}$$

26.

$$\begin{array}{r} 10 \\ - \square \\ \hline 7 \end{array}$$

$$\begin{array}{r} 3 \\ + 7 \\ \hline \square \end{array}$$

27.

$$\begin{array}{r} 10 \\ + \square \\ \hline 11 \end{array}$$

$$\begin{array}{r} \square \\ - 10 \\ \hline 1 \end{array}$$

Order each group of numbers from smallest to largest.

28.

14, 16, 61

\_\_\_\_\_, \_\_\_\_\_, \_\_\_\_\_

29.

19, 1, 4

\_\_\_\_\_, \_\_\_\_\_, \_\_\_\_\_

30.

12, 8, 20

\_\_\_\_\_, \_\_\_\_\_, \_\_\_\_\_

**Fill in the missing number.**

31. 4 tens and 2 ones = _____	32. 1 ten and ____ ones = 19
33. ____ tens and 6 ones = 26	34. 3 tens and ____ ones = 37

**Write the sum.**

35. $\begin{array}{r} 6 \\ + 3 \\ \hline \end{array}$	36. $\begin{array}{r} 7 \\ + 1 \\ \hline \end{array}$	37. $\begin{array}{r} 3 \\ + 2 \\ \hline \end{array}$	38. $\begin{array}{r} 1 \\ + 1 \\ \hline \end{array}$	39. $\begin{array}{r} 4 \\ + 2 \\ \hline \end{array}$
--	--	--	--	--

**Fill in the missing numbers to complete the addition fact.**

40. $\begin{array}{r} \square \\ + 10 \\ \hline 16 \end{array}$	41. $\begin{array}{r} \square \\ + 7 \\ \hline 11 \end{array}$	42. $\begin{array}{r} 7 \\ + \square \\ \hline 13 \end{array}$	43. $\begin{array}{r} 9 \\ + \square \\ \hline 14 \end{array}$	44. $\begin{array}{r} \square \\ + 9 \\ \hline 17 \end{array}$
--	---	---	---	---

**Circle the smaller number.**

45. 62      2	46. 85      65	47. 20      52
48. 77      13	49. 66      19	50. 23      47

**Fill in the missing number.**

51. 1 ten and ___ ones = 18	52. ___ tens and 1 one = 41
53. 8 tens and 2 ones = _____	54. ___ tens and 4 ones = 4

**Count and then write the tens and ones.**

55. 87 ones = ___ tens and ___ ones Write the number: _____	56. 95 ones = ___ tens and ___ ones Write the number: _____
57. 54 ones = ___ tens and ___ ones Write the number: _____	58. 72 ones = ___ tens and ___ ones Write the number: _____

**Write the difference.**

59. $9 - 5 = \underline{\quad}$	60. $10 - 5 = \underline{\quad}$	61. $6 - 5 = \underline{\quad}$
------------------------------------	-------------------------------------	------------------------------------

**Order each group of numbers from smallest to largest.**

62. 7, 1, 0	_____, _____, _____
63. 3, 10, 8	_____, _____, _____
64. 6, 4, 9	_____, _____, _____